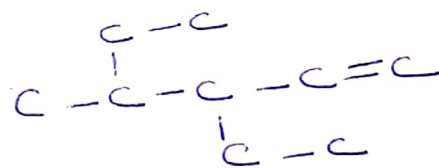
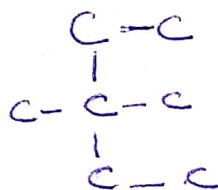
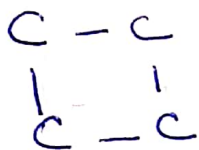
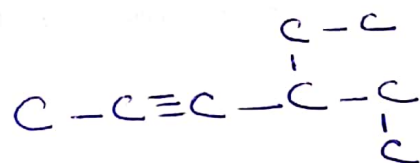
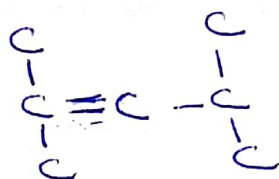
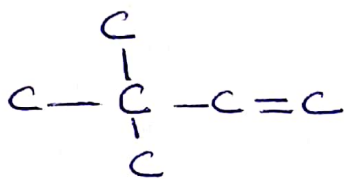


Nomenclatura de hidrocarburos:

1) Completar con los átomos de hidrógenos correspondientes y nombrar:



2) Realizar la FSD y la FM de:

a) 2 pentino

b) 3,3 dimetil 4 propil OCTANO

c) 3,5 OCTADIENO