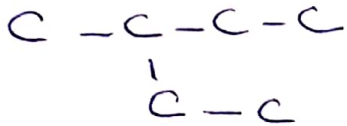


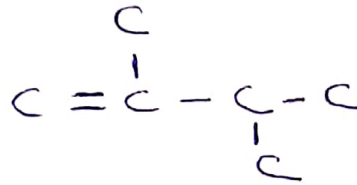
# QUÍMICA ORGÁNICA - 5º 1º TECTA

1) NOMBRAR - Realizar la FM - Reconocer quienes son isómeros y clasificarlos. (SIEMPRE COMPLETAR CON LA CANTIDAD DE HIDRÓGENOS CORRECTA)

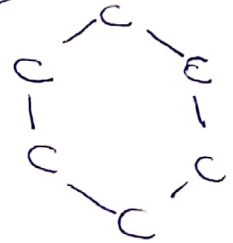
a)



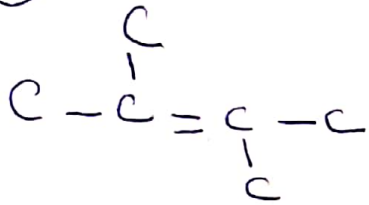
b)



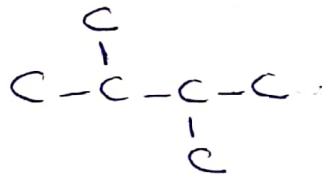
c)



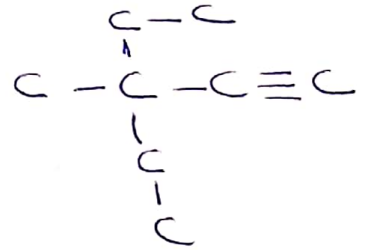
d)



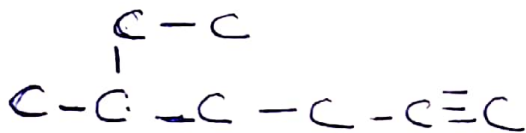
e)



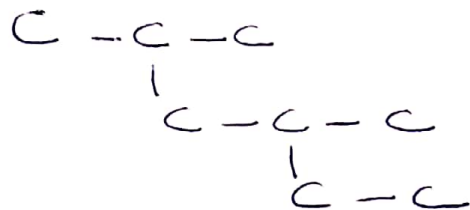
f)



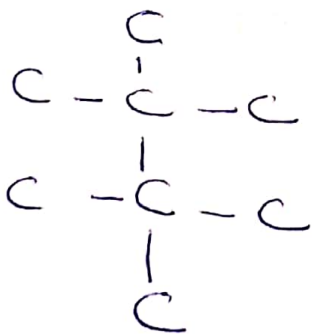
g)



h)



i)



j)

